



Bell Ringer

October 30, 2012


What symbol has to come next in the sequence of the five symbols in the illustration?





Bell Ringer

October 30, 2012



As shown in the illustration each figure in the sequence is formed of one of the numerals 1 through 5 and its mirror reflection joined together as the right and left parts of the figure. The vertical lines of symmetry are shown in red.

Thus the sixth figure has to be the 6 combined with its mirror reflection as shown.



Bell Ringer
October 31, 2012
Halloween Trivia

1. What was the most popular Halloween candy in 2004?
A. Snickers B. Candy Corn C. M&Ms D. Tootsie Rolls
2. The first Jack-O-Lanterns were made out of what?
A. Watermelons B. Coconuts C. Turnips D. Pumpkins
3. According to superstition, if you stare in the mirror at midnight on Halloween, what will you see?
A. Bloody Mary B. Your Future Spouse C. Your Death D. Dead Ancestors




Bell Ringer
October 31, 2012
Halloween Trivia

1. What was the most popular Halloween candy in 2004?
A. Snickers B. **Candy Corn** C. M&Ms D. Tootsie Rolls
2. The first Jack-O-Lanterns were made out of what?
A. Watermelons B. Coconuts C. **Turnips** D. Pumpkins
3. According to superstition, if you stare in the mirror at midnight on Halloween, what will you see?
A. Bloody Mary B. **Your Future Spouse** C. Your Death D. Dead Ancestors



Bell Ringer

November 1, 2012




One of the two spirals in the illustration consists of a single piece of rope that has its ends joined. The other spiral consists of two separate pieces of rope, each with joined ends. Can you identify which is which using only your eyes?



Bell Ringer

November 1, 2012






Bell Ringer

November 2, 2012

There is a perfect star in the illustration. Can you discover where this star is hidden?



Bell Ringer
November 2, 2012

